



LESSON: MAPPING OUR NEIGHBOURHOOD

WORKSHEET - 2

RESOURCE PERSON: MIDHAT FATIMA

NAME: \_\_\_\_\_ CLASS: IV SEC: \_\_\_\_\_ DATE: \_\_\_\_\_

**I. Use the picture clues given below and answer the following**

1 a. Identify the type of map shown in the picture given

alongside. \_\_\_\_\_

b. It helps us to locate a place in a \_\_\_\_\_.

c. We can get them at \_\_\_\_\_,  
\_\_\_\_\_ and \_\_\_\_\_.



2 a. Suzy is prepared for a jungle campfire. She packed everything she would need for the trip. In her hand is one of the crucial devices. Identify that gadget.

\_\_\_\_\_

b. It helps us show the four \_\_\_\_\_ and  
four \_\_\_\_\_.

c. Why are directions an important language of a map?

\_\_\_\_\_  
\_\_\_\_\_

**II. Give an appropriate reason to the statement given below.**

1. Directions, colours, signs and symbols and scale form the four most important integral part of the language of any map. They remain the same all over the world.

a. Do you think that the language of a map must remain same? \_\_\_\_\_

Justify your answer with an appropriate reason.

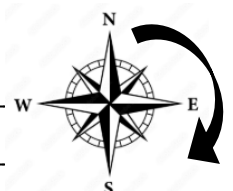
\_\_\_\_\_  
\_\_\_\_\_



**III. Think and give appropriate answers to the questions that follow.**

1. When we move in a clock-wise direction, the directions on an eight - point compass rose are as follows:

\_\_\_\_\_  
\_\_\_\_\_



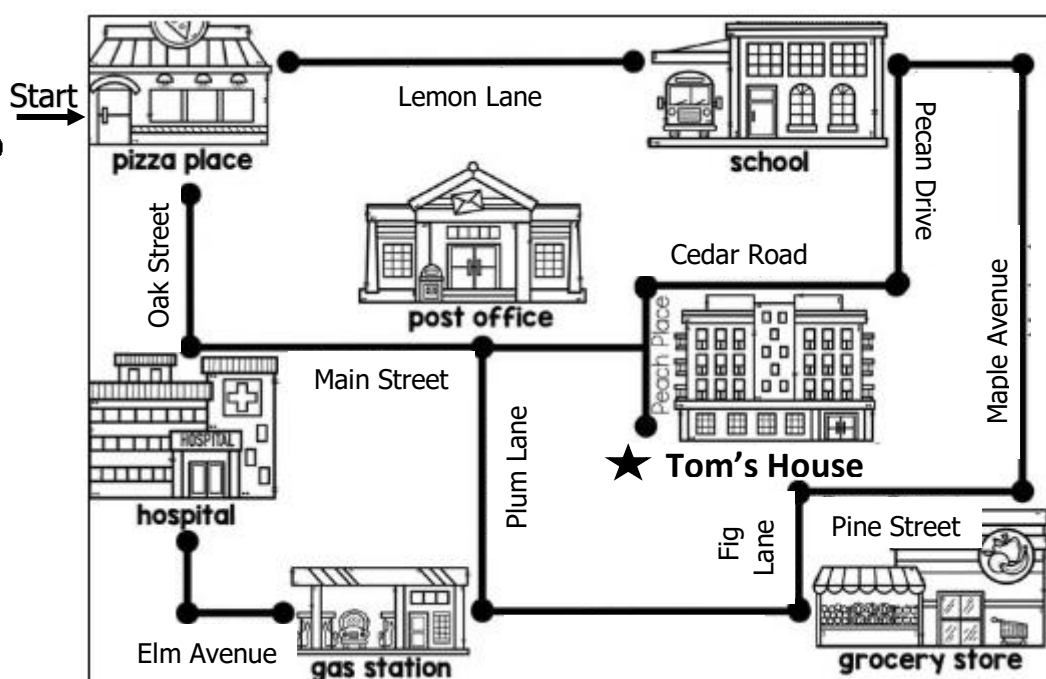

2. Maps show boundaries. Do you think boundaries are important? Can we all live in peace on this Earth without boundaries?

---

---

---

**IV. Sara was invited by her friend Tom to work on a project on the topic 'National Handloom Day' which is celebrated every year on 7<sup>th</sup> of August. Observe the map given below carefully. Help Sara to reach Tom's house safely by answering the following questions.**  
**(Scan the code to know more about 'National Handloom Day')**



Scan me!



1. Walking down the Oak Street lane, in which direction will Sara move to reach the hospital?  
\_\_\_\_\_
2. The \_\_\_\_\_ is the landmark she found during her walk through the Elm Avenue.
3. Crossing the gas station she takes a \_\_\_\_\_ (left/ right) turn to choose the Plum Lane.
4. She could see the \_\_\_\_\_ which lies to the north of the gas station.
5. Now, taking \_\_\_\_\_ (left/ right) turn on the Main Street Road, Sara could find her destination which lies in the \_\_\_\_\_ direction of the post office.
6. Colour Sara's destination (Tom's House) with your favourite colour to show that you have successfully helped her reach her destination safely.